

ГРУПА Б

СЪСТЕЗАНИЕ ПО МАТЕМАТИКА

УЧАСТНИК №

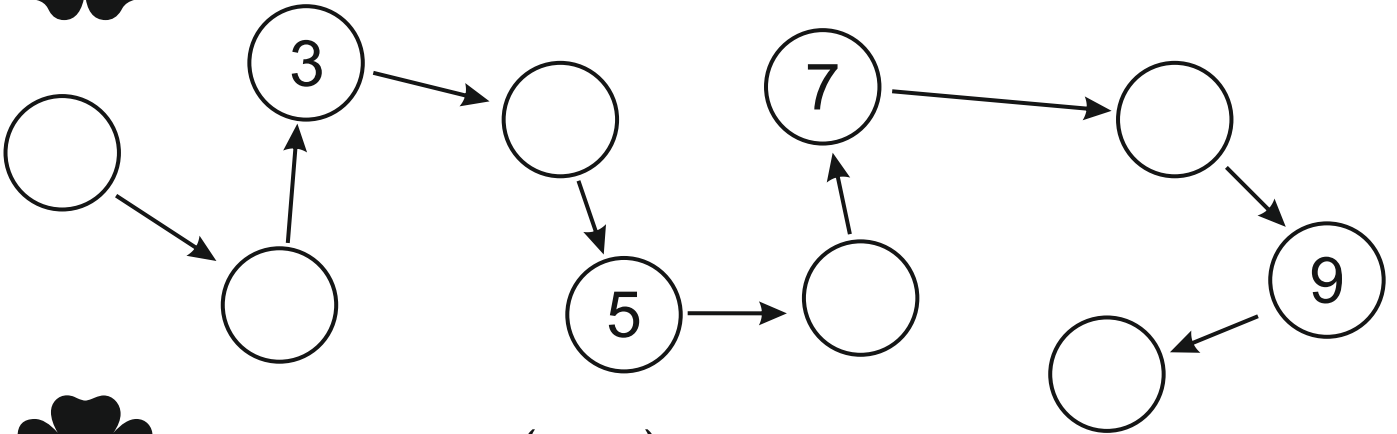
18.02.2017 г.

Решавай ДРУЖБА

за деца от ПГ - 6 г. (IV група)

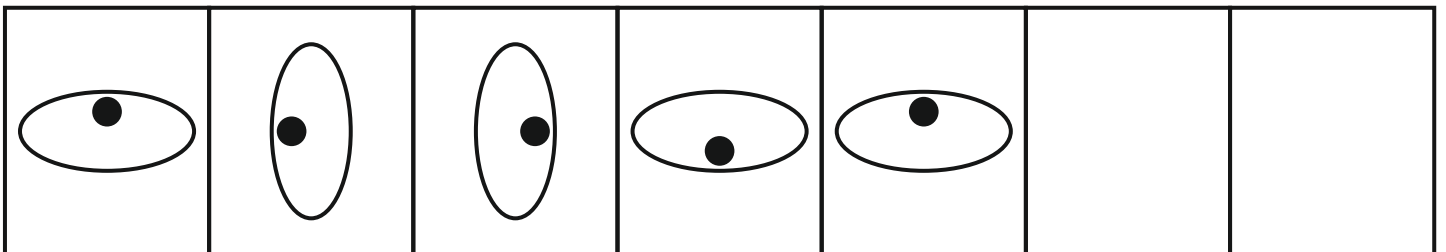
1

ЗАДАЧА (3 т.)



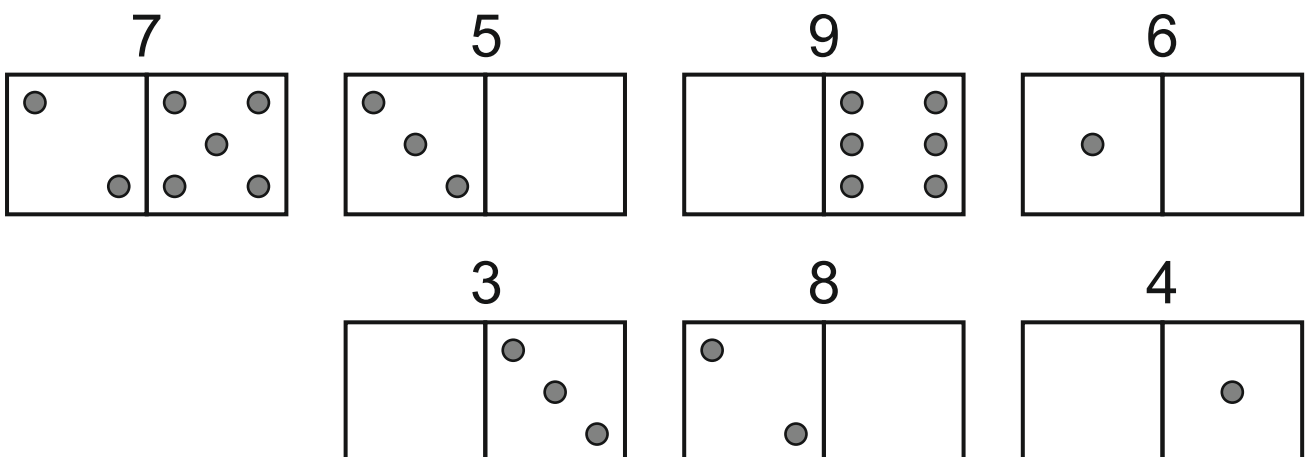
2

ЗАДАЧА (2 т.)



3

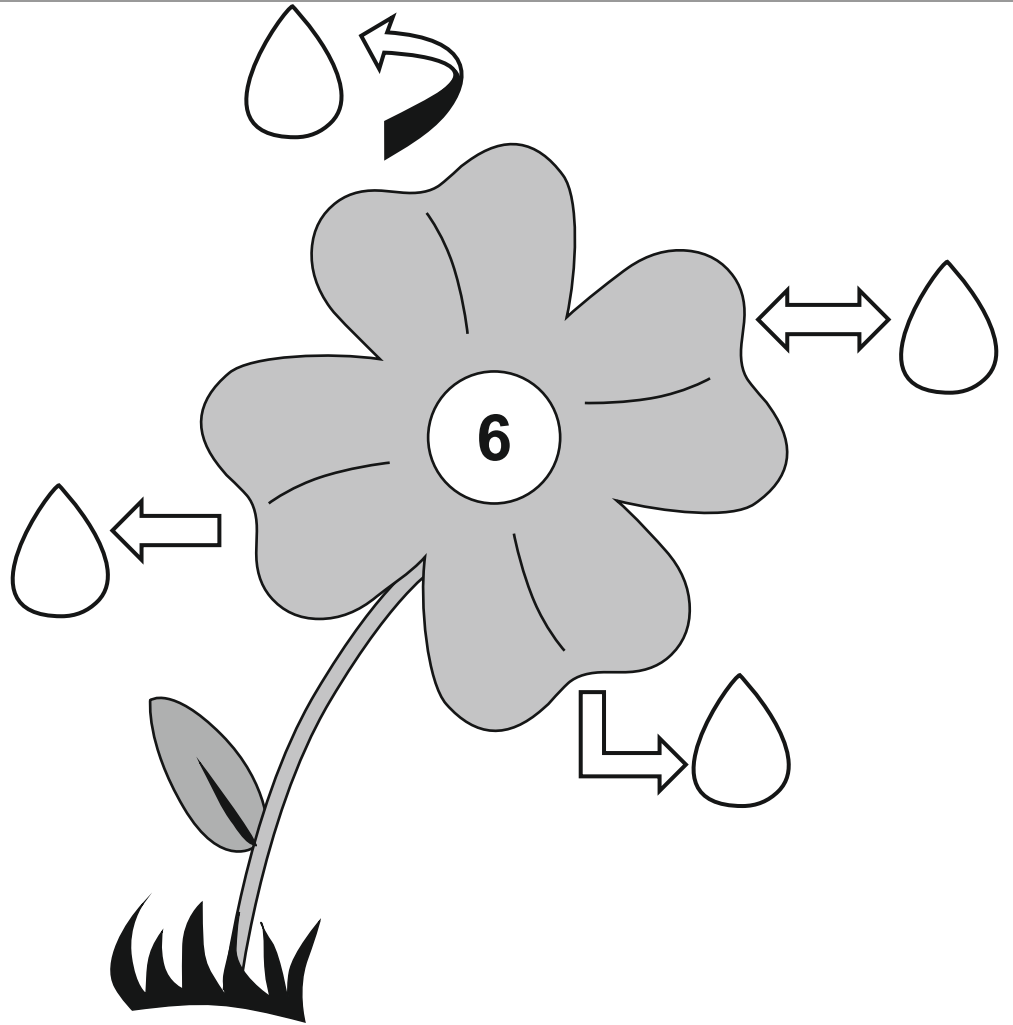
ЗАДАЧА (6 т.)



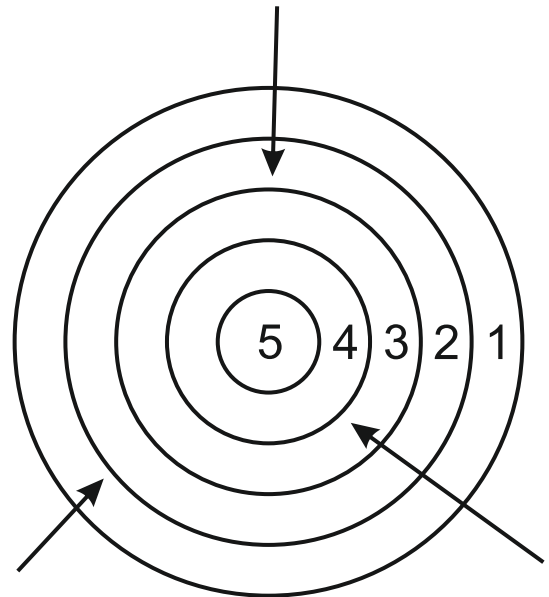
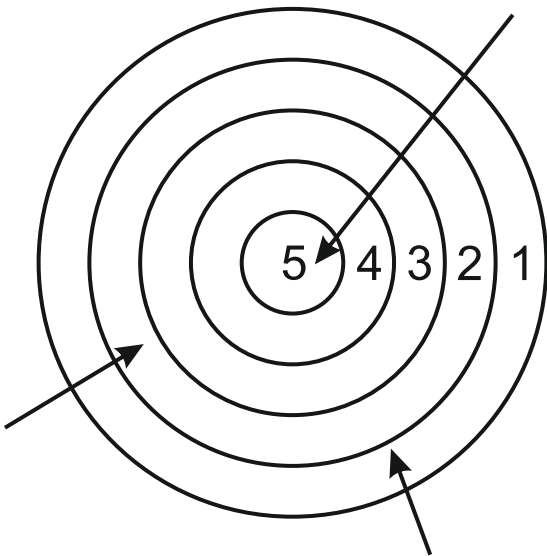


ЗАДАЧА (6 т.)

- 4
- + 3
- 2
- + 0



ЗАДАЧА (4 т.)



$$\square + \square + \square = \square ?$$

$$\square + \square + \square = \square ?$$



ЗАДАЧА (6 т.)



$$\boxed{6} + \boxed{3} = \boxed{}$$

$$\boxed{2} + \boxed{} = \boxed{9}$$

$$\boxed{7} - \boxed{4} = \boxed{}$$

$$\boxed{} - \boxed{3} = \boxed{4}$$

$$\boxed{} - \boxed{5} = \boxed{2} + \boxed{2}$$

$$\boxed{6} + \boxed{} = \boxed{9} - \boxed{1}$$



ЗАДАЧА (6 т.)



$$\boxed{2} \boxed{} \boxed{6}$$

$$\boxed{3} + \boxed{3} \boxed{} \boxed{8}$$

$$\boxed{8} \boxed{} \boxed{3}$$

$$\boxed{9} - \boxed{5} \boxed{} \boxed{2}$$

$$\boxed{8} - \boxed{3} \boxed{} \boxed{7} + \boxed{3}$$

$$\boxed{1} + \boxed{6} \boxed{} \boxed{5} + \boxed{0}$$



ЗАДАЧА (6 т.)

