

УЧАСТНИК № .....

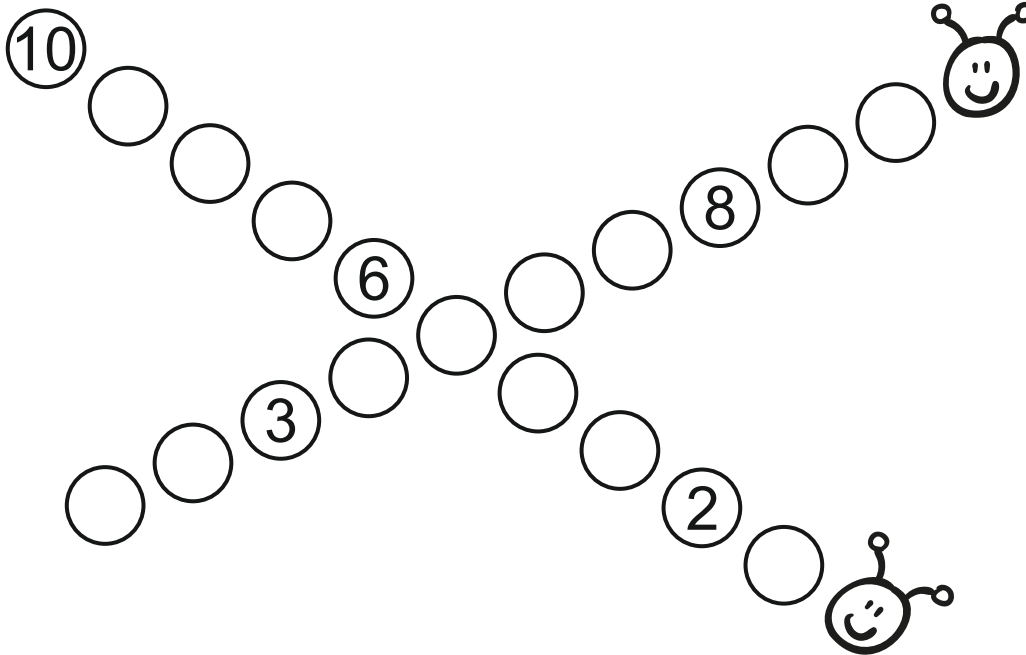
10.02.2018 г.

Решавай  
ДРУЖБА

за деца от ПГ - 6 г. (IV група)



1. ЗАДАЧА (3 точки)



2. ЗАДАЧА (6 точки)

+ -



$$\boxed{9} - \boxed{7} = \boxed{\phantom{00}}$$

$$\boxed{2} + \boxed{5} = \boxed{\phantom{00}}$$

$$\boxed{4} + \boxed{2} = \boxed{\phantom{00}} - \boxed{2}$$

$$\boxed{\phantom{00}} - \boxed{2} = \boxed{7} - \boxed{3}$$

$$\boxed{4} + \boxed{\phantom{00}} = \boxed{8} - \boxed{4}$$

$$\boxed{5} + \boxed{\phantom{00}} = \boxed{9} - \boxed{3}$$

**3.****ЗАДАЧА (6 точки)****> < =**

$5 \square 3$


$3 \square 9$

$6 - 0 \square 8$

$2 + 5 \square 3 + 4$

$8 - 7 \square 2 + 3$

$4 + 4 \square 6 + 1$

**4.****ЗАДАЧА (6 точки)**

$\square + \square + \square < 8$

a)  $\left. \begin{array}{l} 7 \quad 2 \\ \quad 0 \end{array} \right\}$       $\left. \begin{array}{l} 3 \quad 4 \\ \quad 2 \end{array} \right\}$       $\left. \begin{array}{l} 6 \quad 0 \\ \quad 4 \end{array} \right\}$       $\left. \begin{array}{l} 2 \quad 4 \\ \quad 1 \end{array} \right\}$

$\square + \square + \square > 9$


a)  $\left. \begin{array}{l} 5 \quad 2 \\ \quad 3 \end{array} \right\}$       $\left. \begin{array}{l} 4 \quad 0 \\ \quad 5 \end{array} \right\}$       $\left. \begin{array}{l} 2 \quad 6 \\ \quad 1 \end{array} \right\}$       $\left. \begin{array}{l} 4 \quad 0 \\ \quad 4 \end{array} \right\}$

$\square - \square - \square = 3$

a)  $\left. \begin{array}{l} 10 \quad 4 \\ \quad 0 \end{array} \right\}$       $\left. \begin{array}{l} 10 \quad 7 \\ \quad 3 \end{array} \right\}$       $\left. \begin{array}{l} 9 \quad 4 \\ \quad 4 \end{array} \right\}$       $\left. \begin{array}{l} 9 \quad 3 \\ \quad 3 \end{array} \right\}$

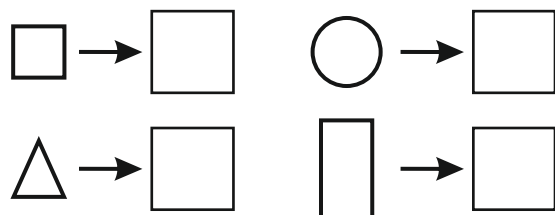


5.

ЗАДАЧА (4 точки)



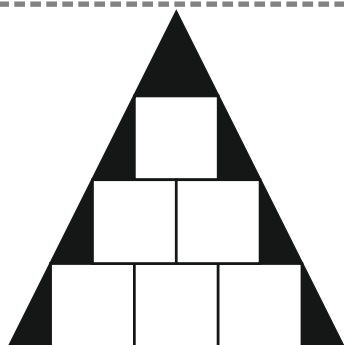

6.

ЗАДАЧА (6 точки)



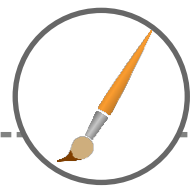
7.


ЗАДАЧА (4 точки)



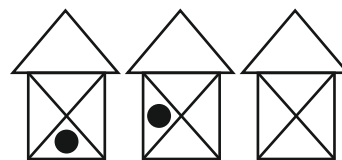
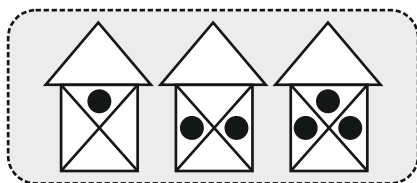
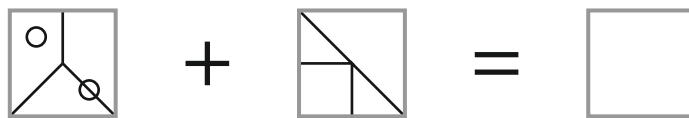
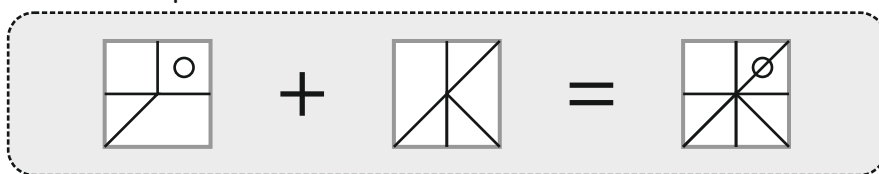

$$\blacktriangle - \square =$$

# 8. ЗАДАЧА (8 ТОЧКИ)



# 9. ЗАДАЧА (6 ТОЧКИ)



# 10. ЗАДАЧА (6 ТОЧКИ)

